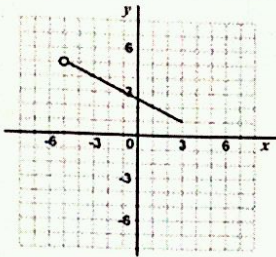

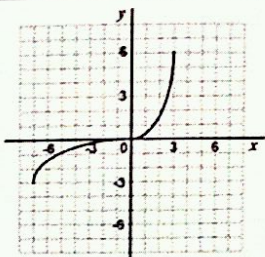
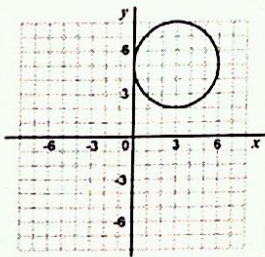
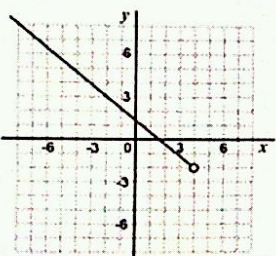
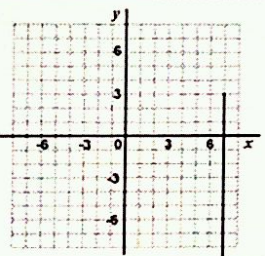
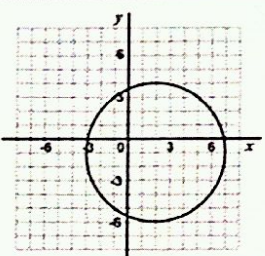
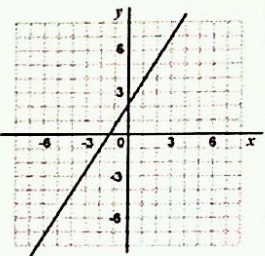
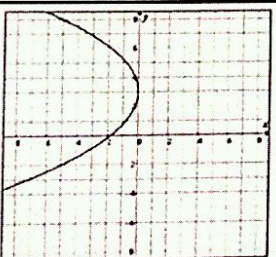
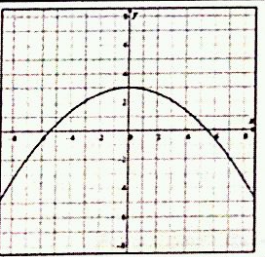
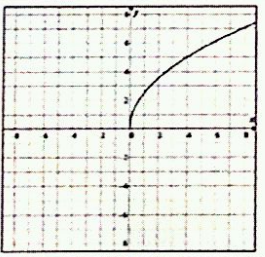
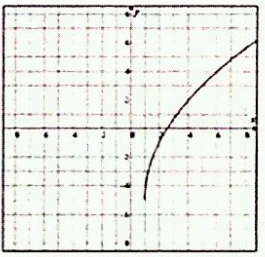
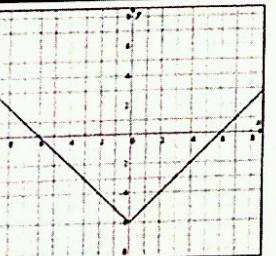
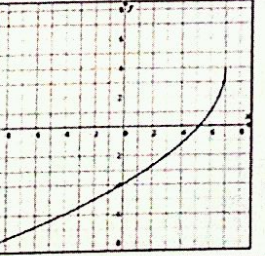
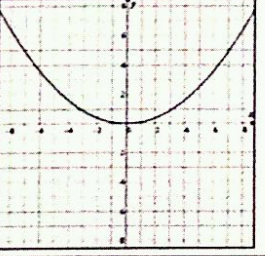
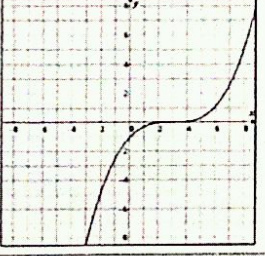


Domain & Range

Date: _____

State the Domain and Range of each of the given relations in the space provided. *Assume that graphs drawn to the edge of the grid continue on infinitely.*

			
D: _____ R: _____	D: _____ R: _____	D: _____ R: _____	D: _____ R: _____
			
D: _____ R: _____	D: _____ R: _____	D: _____ R: _____	D: _____ R: _____
			
D: _____ R: _____	D: _____ R: _____	D: _____ R: _____	D: _____ R: _____
			
D: _____ R: _____	D: _____ R: _____	D: _____ R: _____	D: _____ R: _____